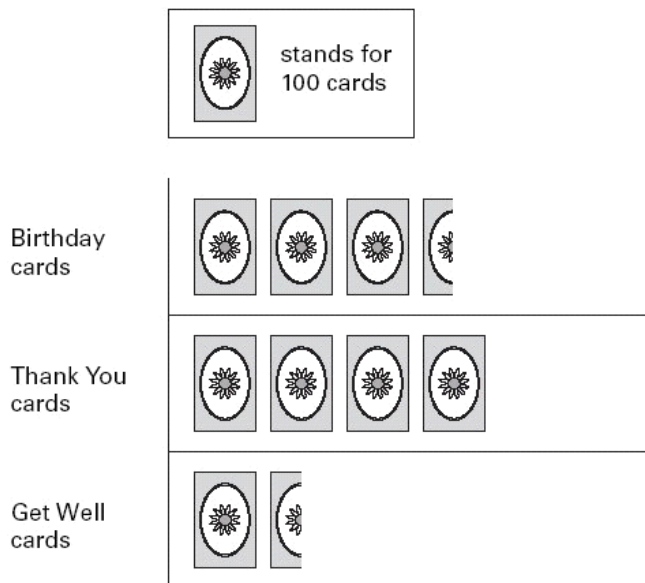


1. A shop sells different kinds of greeting cards.

This pictogram shows how many they sold in a week.



Estimate how many Birthday cards were sold.



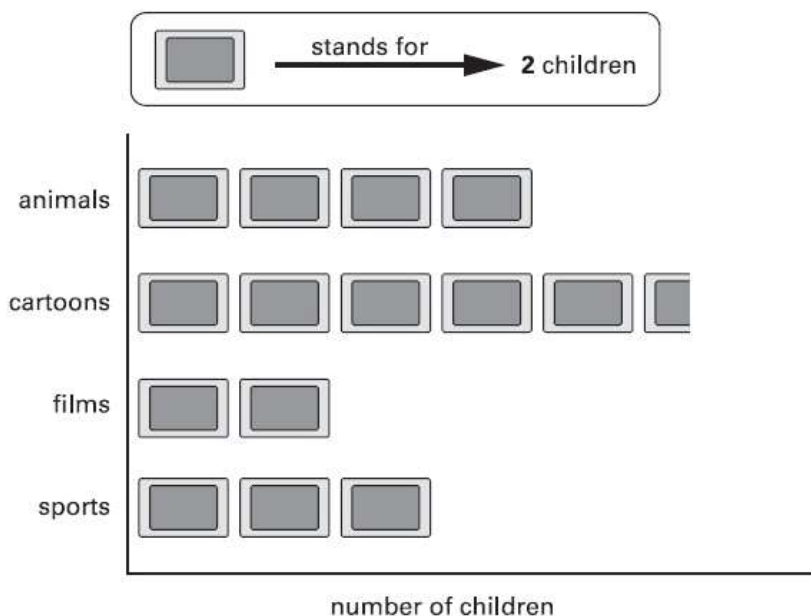
Estimate how many more Thank You cards than Get Well cards were sold.




2. Kiz asked each child in his class,

'What kind of television programme do you prefer to watch?'

Here are his results.

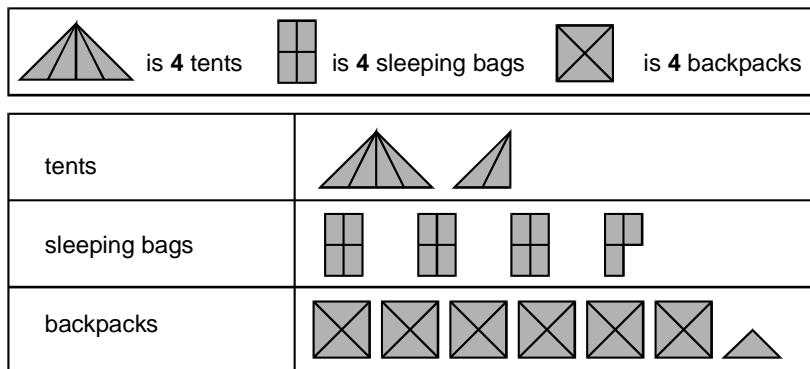


How many **more** children prefer to watch cartoons than films?



3. A camping shop sells **tents**, **sleeping bags** and **backpacks**.

This chart shows how many of each they sold in June.




The shop had **20** sleeping bags at the **beginning of June**.

How many of these sleeping bags did the shop have left at the **end of June**?




In **July**, the shop sold **three times as many tents** as in June.














How many tents did the shop sell in **July**?




4. Park School collects money for three charities.

 stands for £100

This pictogram shows
how much they have collected.

 Save Dolphins					
 Wildwatch					
 Plant-a-Tree					

How much more have they collected for Save Dolphins than Plant-a-Tree?



The target for Wildwatch is £500

How much **more** money do they need to collect for Wildwatch?



How much money have they collected altogether, rounded **to the nearest hundred pounds**?

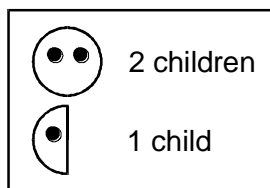


5.

Class survey of favourite fruit drinks

flavour	number of children
pineapple	2
orange	10
blackcurrant	8
grapefruit	6
apple	9

- (a) Complete the pictogram for the class.



flavour	number of children
blackcurrant	
apple	
orange	
pineapple	

1 mark

- (b) How many children altogether chose the three most popular flavours?

1 mark

- (c) Write another question you can ask someone about the results of the class survey.

.....

.....

.....

1 mark