

# MATHEMATICS

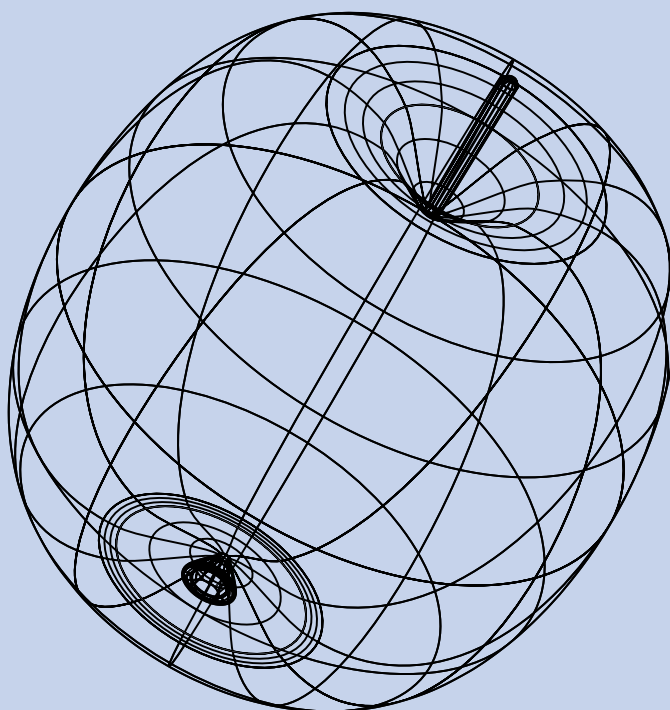
KEY STAGE 2 2000

TEST C

LEVEL  
**6**

CALCULATOR ALLOWED

PAGE	MARKS
1	
3	
5	
7	
9	
11	
13	
14	
TOTAL	



**First Name**

**Last Name**

**School**



# Instructions

You **may** use a calculator to answer any questions in this test.

Work as quickly and as carefully as you can.

You have **30 minutes** for this test.

If you cannot do one of the questions, **go on to the next one**.  
You can come back to it later, if you have time.

If you finish before the end, **go back and check your work**.

**Follow the instructions for each question carefully.**



This shows where you need to put the answer.

If you need to do working out, you can use any space on a page.

**Some questions look like this:**



Show  
your **method**.  
You may get  
a mark.

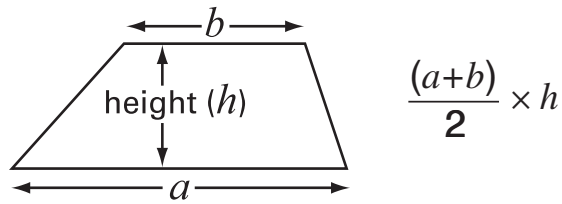
A rectangular box for writing the answer.

For these questions you may get a mark for showing your method.

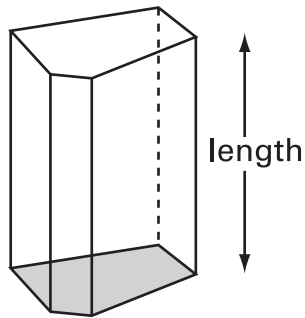
# Formulae

You might need to use these formulae in this test.

## Area of a trapezium



## Volume of a prism



area of cross-section x length